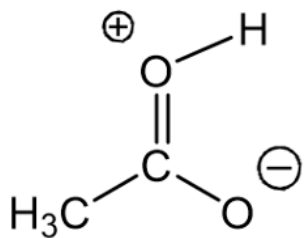


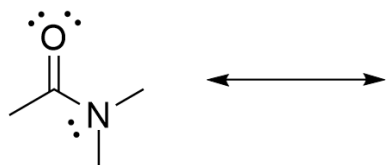
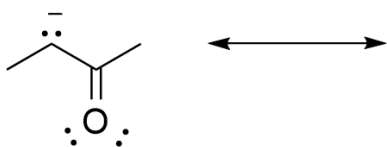
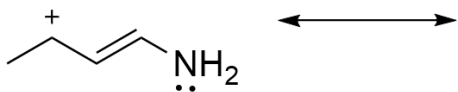

1.

Draw a resonance form of the molecule below. Show the curved arrows which indicate the movement of electrons needed to produce the resonance form.



2.

Draw all the resonance forms possible for the following molecules. Use curved arrows to indicate electron movement.



3.

